

$$\begin{array}{r} \boxed{\text{☆☆☆☆}} \quad 2 \\ \times 3 \\ \hline \boxed{} \end{array}$$

$$\begin{array}{r} \boxed{\text{☆☆☆☆}} \quad 3 \\ \times 4 \\ \hline \boxed{} \end{array}$$

$$\begin{array}{r} \boxed{\text{☆☆}} \quad 4 \\ \times \boxed{} \\ \hline \boxed{} \end{array}$$

$$2 \times \boxed{} = \boxed{}$$

$$1 \times \boxed{} = \boxed{}$$

$$\boxed{\text{☆☆☆☆☆☆}} \times \boxed{} = \boxed{}$$

$$\boxed{\text{☆☆☆☆}} \times \boxed{} = \boxed{}$$

$$\boxed{\text{☆☆}} \times \boxed{} = \boxed{}$$

$$\boxed{\text{☆☆☆☆☆☆☆☆}} \times \boxed{} = \boxed{}$$

$$5 \times \boxed{} = \boxed{}$$

$$\boxed{\text{☆☆☆☆☆☆}} \times \boxed{} = \boxed{}$$

$$\begin{array}{r} \boxed{\text{☆☆☆☆}} \quad 2 \\ \times 3 \\ \hline \boxed{} \end{array}$$

$$\begin{array}{r} \boxed{\text{☆☆☆☆}} \quad 3 \\ \times 4 \\ \hline \boxed{} \end{array}$$

$$\begin{array}{r} \boxed{\text{☆☆}} \quad 4 \\ \times \boxed{} \\ \hline \boxed{} \end{array}$$

$$2 \times \boxed{} = \boxed{}$$

$$1 \times \boxed{} = \boxed{}$$

$$\boxed{\text{☆☆☆☆☆☆}} \times \boxed{} = \boxed{}$$

$$\boxed{\text{☆☆☆☆}} \times \boxed{} = \boxed{}$$

$$\boxed{\text{☆☆}} \times \boxed{} = \boxed{}$$

$$\boxed{\text{☆☆☆☆☆☆☆☆}} \times \boxed{} = \boxed{}$$

$$5 \times \boxed{} = \boxed{}$$

$$\boxed{\text{☆☆☆☆☆☆}} \times \boxed{} = \boxed{}$$

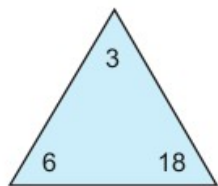
- СОСТАВУВАМ И РЕШАВАМ ЗАДАЧИ СО МНОЖЕЊЕ СО ПОМОШ НА СЛИКА



- СОСТАВУВАМ И РЕШАВАМ ЗАДАЧИ СО МНОЖЕЊЕ СО ПОМОШ НА СЛИКА



Според дадените броеви состави задачи со множење и делење.

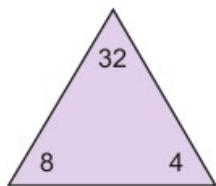


$6 \times 3 = \underline{\quad}$

$3 \times 6 = \underline{\quad}$

$18 \div 3 = \underline{\quad}$

$18 \div 6 = \underline{\quad}$

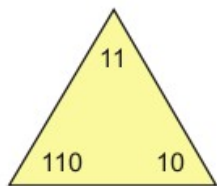


$\underline{\quad} \times \underline{\quad} = \underline{\quad}$

$\underline{\quad} \times \underline{\quad} = \underline{\quad}$

$\underline{\quad} \div \underline{\quad} = \underline{\quad}$

$\underline{\quad} \div \underline{\quad} = \underline{\quad}$



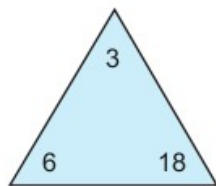
$\underline{\quad} \times \underline{\quad} = \underline{\quad}$

$\underline{\quad} \times \underline{\quad} = \underline{\quad}$

$\underline{\quad} \div \underline{\quad} = \underline{\quad}$

$\underline{\quad} \div \underline{\quad} = \underline{\quad}$

Според дадените броеви состави задачи со множење и делење.

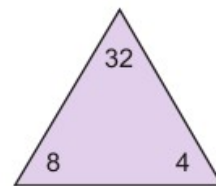


$6 \times 3 = \underline{\quad}$

$3 \times 6 = \underline{\quad}$

$18 \div 3 = \underline{\quad}$

$18 \div 6 = \underline{\quad}$

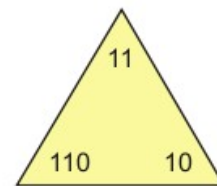


$\underline{\quad} \times \underline{\quad} = \underline{\quad}$

$\underline{\quad} \times \underline{\quad} = \underline{\quad}$

$\underline{\quad} \div \underline{\quad} = \underline{\quad}$

$\underline{\quad} \div \underline{\quad} = \underline{\quad}$

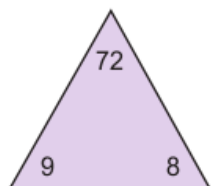


$\underline{\quad} \times \underline{\quad} = \underline{\quad}$

$\underline{\quad} \times \underline{\quad} = \underline{\quad}$

$\underline{\quad} \div \underline{\quad} = \underline{\quad}$

$\underline{\quad} \div \underline{\quad} = \underline{\quad}$



$\underline{\quad} \times \underline{\quad} = \underline{\quad}$

$\underline{\quad} \times \underline{\quad} = \underline{\quad}$

$\underline{\quad} \div \underline{\quad} = \underline{\quad}$

$\underline{\quad} \div \underline{\quad} = \underline{\quad}$



$\underline{\quad} \times \underline{\quad} = \underline{\quad}$

$\underline{\quad} \times \underline{\quad} = \underline{\quad}$

$\underline{\quad} \div \underline{\quad} = \underline{\quad}$

$\underline{\quad} \div \underline{\quad} = \underline{\quad}$

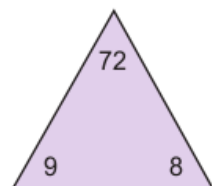


$\underline{\quad} \times \underline{\quad} = \underline{\quad}$

$\underline{\quad} \times \underline{\quad} = \underline{\quad}$

$\underline{\quad} \div \underline{\quad} = \underline{\quad}$

$\underline{\quad} \div \underline{\quad} = \underline{\quad}$

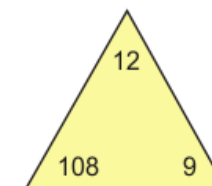


$\underline{\quad} \times \underline{\quad} = \underline{\quad}$

$\underline{\quad} \times \underline{\quad} = \underline{\quad}$

$\underline{\quad} \div \underline{\quad} = \underline{\quad}$

$\underline{\quad} \div \underline{\quad} = \underline{\quad}$

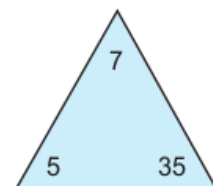


$\underline{\quad} \times \underline{\quad} = \underline{\quad}$

$\underline{\quad} \times \underline{\quad} = \underline{\quad}$

$\underline{\quad} \div \underline{\quad} = \underline{\quad}$

$\underline{\quad} \div \underline{\quad} = \underline{\quad}$



$\underline{\quad} \times \underline{\quad} = \underline{\quad}$

$\underline{\quad} \times \underline{\quad} = \underline{\quad}$

$\underline{\quad} \div \underline{\quad} = \underline{\quad}$

$\underline{\quad} \div \underline{\quad} = \underline{\quad}$

ГИ ЗНАМ ФАКТИТЕ ЗА ДЕЛЕЊЕТО И МНОЖЕЊЕТО



ГИ ЗНАМ ФАКТИТЕ ЗА ДЕЛЕЊЕТО И МНОЖЕЊЕТО



2	x		=	6		x	5	=	30	
				x	x					
	x	1	=		8	x	4	=		
			=		=					
		x	24	=						

2	x		=	6		x	5	=	30	
				x	x					
	x	1	=		8	x	4	=		
			=		=					
		x	24	=						

	x	7	=		3	x	12	=	
x				x	x				
11		5	x		=				
=				=	=				
22				42		x		=	90

	x	7	=		3	x	12	=	
x				x	x				
11		5	x		=				
=				=	=				
22				42		x		=	90

УМЕАМ ДА МНОЖАМ И ДА ОДРЕДУВАМ НЕПОЗНАТ МНОЖИТЕЛ



УМЕАМ ДА МНОЖАМ И ДА ОДРЕДУВАМ НЕПОЗНАТ МНОЖИТЕЛ

